

ELEG403 COMMUNICATIONS SYSTEMS ENGINEERING

ASSIGNMENT #5 due Monday October 13

1. Haykin Problem 4.19
2. Haykin Problem 4.21
3. Haykin Problem 4.23
4. Haykin Problem 7.1
5. Bandlimited white noise $N(t)$ has spectral density $S_W(f) = 10^{-6} \text{ V}^2/\text{Hz}$ over the frequency range -100 kHz to 100 kHz .
 - a) What is the rms value of the noise?
 - b) Find $R_W(t)$. At what spacings are $n(t)$ and $n(t+\tau)$ uncorrelated?
6. The multitone modulating signal $m(t) = K(2\cos(\omega_m t) + \cos(2\omega_m t) + 3\cos(5\omega_m t))$ is the input to an AM system.
 - a) Find K so that $m(t)$ is properly normalized (i.e. to prevent overmodulation).
 - b) Plot the frequency spectrum of the transmitted signal $s(t)$.
 - c) Calculate $P_{\text{side}}/P_{\text{carrier}}$ and $P_{\text{carrier}}/P_{\text{total}}$. (P represents power.)

SOLUTIONS TO ASSIGNMENT #5

1. Haykin Problem #4.19

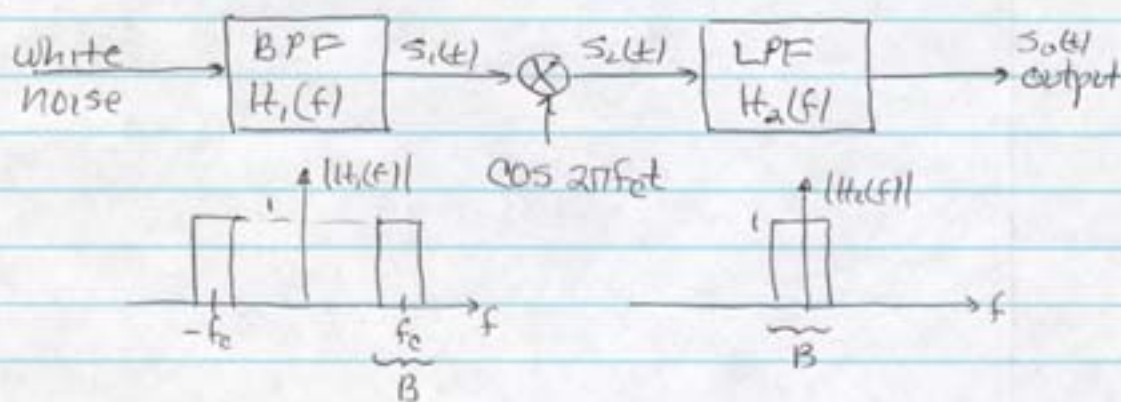
a) The dc power of the random process $X(t)$ is determined by the delta function contained in the power spectral density $S_X(f)$ at $f=0$.

$$P_{dc} = 1$$

b) The ac power equals the total area under the curve of $S_X(f)$, excluding the delta function at $f=0$.

$$P_{ac} = 2(1)(2) = 4$$

2. Haykin Problem #4.21



$$a.) \quad S_w(f) = \begin{cases} N_0/2 & \text{for all } f \\ S_1(f) = \begin{cases} N_0/2 & |f-f_0| \leq B/2 \\ 0 & \text{elsewhere} \end{cases} \end{cases}$$

$$S_2(f) = \frac{1}{4} [S_1(f+f_0) + S_1(f-f_0)]$$

$$= \begin{cases} N_0/4, & |f| \leq B/2 \\ N_0/8, & |f-2f_0| \leq B/2 \\ 0, & \text{elsewhere} \end{cases}$$



a. cont'd) $\therefore S_o(f) = \begin{cases} N_o/4, & -B/2 \leq f \leq B/2 \\ 0, & \text{elsewhere} \end{cases}$

b.) $P_{av} = B \cdot \frac{N_o}{4} = \frac{N_o B}{4}$

3. Haykin Problem # 4.23

Butterworth filter $|H(f)| = \frac{1}{\sqrt{1 + (f/f_o)^{2n}}}$

a.) noise equivalent bandwidth

$$B_N = \frac{\int_0^\infty |H(f)|^2 df}{H^2(0)}$$

$$= \int_0^\infty \frac{1}{1 + (f/f_o)^{2n}} df = \frac{\pi f_o}{2n \sin(\pi/2n)}$$

$$= \frac{f_o}{\text{sinc}(1/2n)}$$

b.) $B_N = f_o \lim_{n \rightarrow \infty} \frac{1}{\text{sinc}(1/2n)} = f_o$

4. Haykin Problem # 7.1

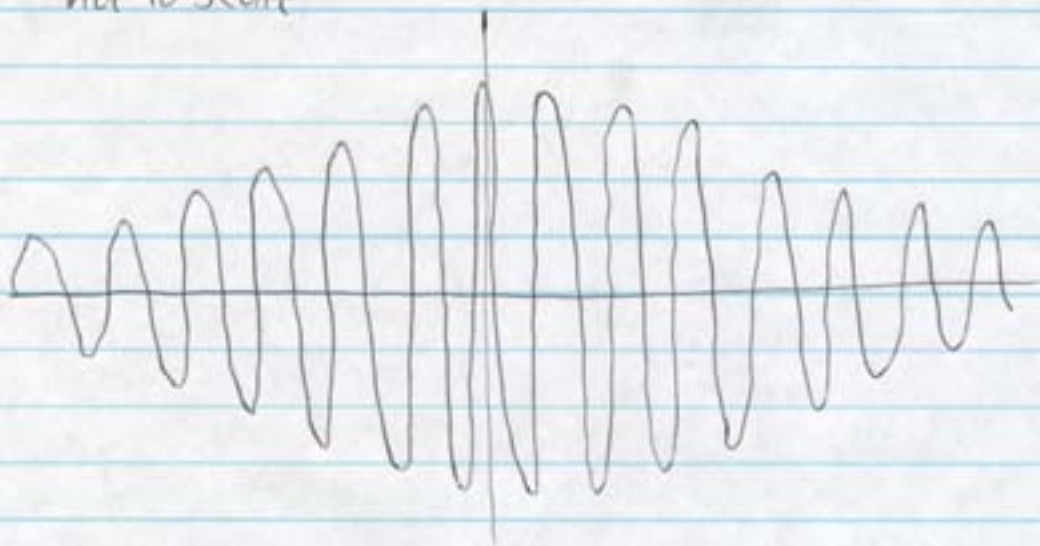
$m(t) = 20 \cos(2\pi t)$ volts
 $c(t) = 50 \cos(100\pi t)$ volts

a.) AM wave with 75% modulation

$S(t) = 50 [1 + 0.75 \cos(2\pi t)] \cos 100\pi t$

4. cont'd)

not to scale



$$b.) \quad s(t) = 50 \cos(100\pi t) + 18.75 \cos(102\pi t) + 18.75 \cos(98\pi t)$$

Hence, the average power of $s(t)$ is

$$P_{av} = \frac{1}{2} (50)^2 + \frac{1}{2} (18.75)^2 + \frac{1}{2} (18.75)^2$$

$$= 1250 + 351.56 = 1601.56$$

100 Ω resistor missing

5.

$$S_w(f) = \begin{cases} 10^{-6} \text{ V}^2/\text{Hz}, & |f| \leq 100 \text{ kHz} \\ 0, & \text{elsewhere} \end{cases}$$

a.) rms value = σ_n

$$\sigma_n^2 = E[n(t)n(t)]$$

Assume $\rightarrow 0$ (zero mean) - valid assumption

$$= R_w(0) = \int_{-\infty}^{\infty} S_w(f) df = 2 \text{ kHz} = 0.2 \text{ V}^2$$

$$\text{rms value} = \sqrt{0.2 \text{ V}^2} = 0.447 \text{ V}$$

$$b.) \quad R_w(\tau) = \mathcal{F}^{-1}[S_w(f)]$$

$$= k \int_{-B}^B e^{j2\pi f\tau} df = \frac{k}{\pi\tau} \sin 2\pi B\tau$$

5. cont'd)

$$\therefore R_w(\tau) = 0.2 \frac{\sin 2\pi \cdot 10^5 \tau}{2\pi \cdot 10^5 \tau}$$

→ $n(t)$ and $n(t+\tau)$ are uncorrelated if $R_w(\tau) = 0$

$$R_w(\tau) = 0 \text{ if } 2\pi B\tau = n\pi, n \neq 0$$

$$\tau = \frac{n}{2B} = \frac{n}{2 \cdot 10^5 \text{ Hz}} = n \cdot 5 \mu\text{sec}, n=1,2,\dots$$

6. $m(t) = K(2 \cos \omega_m t + \cos 2\omega_m t + 3 \cos 5\omega_m t)$

a.) normalize $m(t)$, i.e., $|m(t)| \leq 1 \Rightarrow |m(t)|_{\max} = 1$

$$|m(t)|_{\max} = K(2+1+3) = 6K \Rightarrow 1$$

$$K = 1/6 \text{ (or more generally } K = 1/6k_0)$$

b.) $s(t) = A_c [1 + k_a m(t)] \cos \omega_c t$

$$= A_c \cos \omega_c t + A_c k_a m(t) \cos \omega_c t$$

where

$$m(t) \cos \omega_c t = \frac{K}{2} [2 \cos(\omega_c + \omega_m)t + 2 \cos(\omega_c - \omega_m)t + \cos(\omega_c + 2\omega_m)t + \cos(\omega_c - 2\omega_m)t + 3 \cos(\omega_c + 5\omega_m)t + 3 \cos(\omega_c - 5\omega_m)t]$$

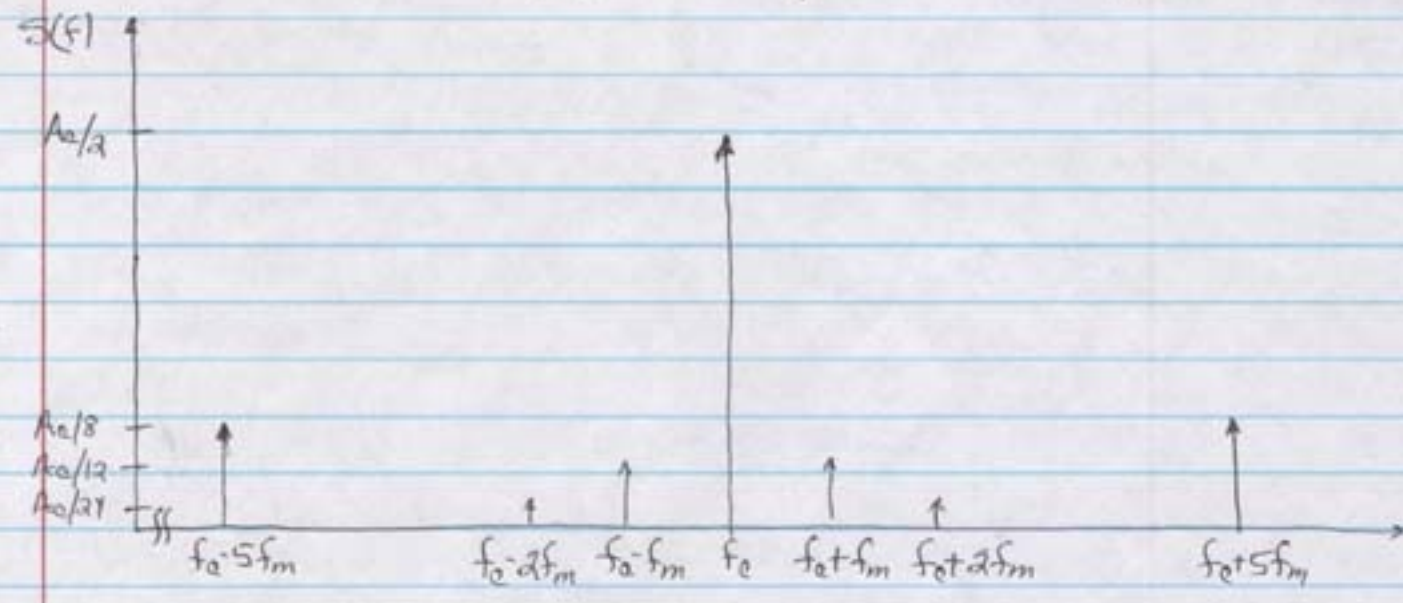
$$S(f) = \frac{A_c}{2} [\delta(f-f_c) + \delta(f+f_c)]$$

$$+ \frac{A_c k_a K}{4} [2 \delta(f-f_c-f_m) + 2 \delta(f-f_c+f_m)$$

$\frac{A_c}{24}$

$$+ 2 \delta(f+f_c-f_m) + 2 \delta(f+f_c+f_m) + \delta(f-f_c-2f_m) + \delta(f-f_c+2f_m) + \delta(f+f_c-2f_m) + \delta(f+f_c+2f_m) + 3 \delta(f-f_c-5f_m) + 3 \delta(f-f_c+5f_m) + 3 \delta(f+f_c-5f_m) + 3 \delta(f+f_c+5f_m)]$$

6. cont'd) - for convenience, only positive frequencies will be plotted



c.) $P_{carrier} = A_c^2/2$

$P_{side} \Rightarrow$ group all sidebands together - only one side
(assume $k_a = 1$ for simplicity)

$$= 2 \frac{A_c^2 K^2}{16} [4 + 1 + 9] = \frac{14}{8} A_c^2 K^2 = \frac{7}{4} A_c^2 K^2$$

$$P_{total} = P_{carrier} + 2 P_{side}$$

$$= \frac{A_c^2}{2} (1 + 7K^2)$$

$$\frac{P_{side}}{P_{carrier}} = 2 \frac{\frac{7}{4} A_c^2 K^2}{A_c^2/2} = \frac{7}{2} K^2 \leq \frac{7}{2}$$

$$\frac{P_{carrier}}{P_{total}} = \frac{A_c^2/2}{A_c^2/2 (1 + 7K^2)} = \frac{1}{1 + 7K^2} \geq \frac{36}{43} \approx 84\%$$

i.e. most of the transmitted power is in the carrier which provides no information \Rightarrow wasted!

ELEG403 COMMUNICATIONS SYSTEMS ENGINEERING

ASSIGNMENT #6 due Monday October 20

1. Haykin Problem 7.13
2. Haykin Problem 7.14
3. Haykin Problem 7.18
4. Haykin Problem 7.30
5. Haykin Problem 7.38

SOLUTIONS TO ASSIGNMENT #6

1. Haykin Problem #7.13

DSBSC with coherent detection but mismatched frequency

a.) Multiplying the DSBSC signal by the local oscillator gives

$$\begin{aligned} S_1(t) &= A_c m(t) \cos(2\pi f_c t) \cos[2\pi(f_c + \Delta f)t] \\ &= \frac{A_c m(t)}{2} [\cos(2\pi \Delta f t) + \cos(2\pi(2f_c + \Delta f)t)] \end{aligned}$$

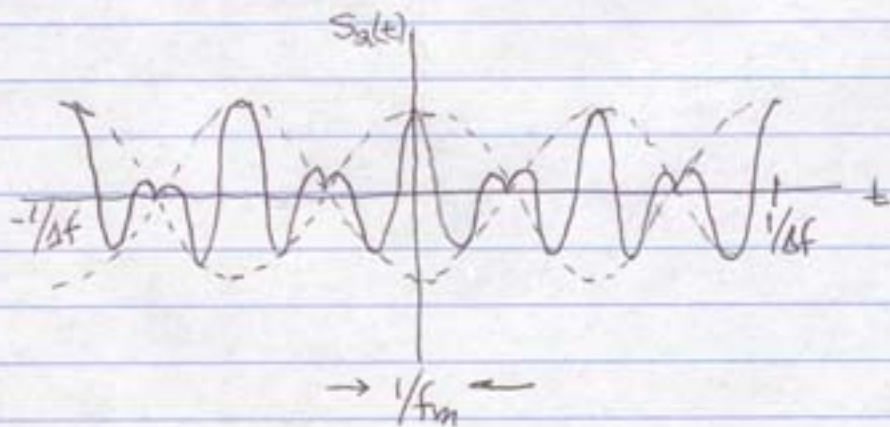
After lowpass filtering,

$$S_2(t) = \frac{A_c}{2} m(t) \cos(2\pi \Delta f t)$$

Thus, the output signal is the message signal modulated by a sinusoid of frequency Δf .

b.) $m(t) = \cos(2\pi f_m t)$

$$S_2(t) = \frac{A_c}{2} m(t) [\cos 2\pi(f_m - \Delta f)t + \cos 2\pi(f_m + \Delta f)t]$$



2. Haykin Problem # 7.14

$$s(t) = A_c \cos(2\pi f_c t + \phi) + \cos(2\pi f_c t) m(t) \rightarrow \text{envelope detector}$$

$$= m(t) \cos(2\pi f_c t) + A_c \cos \phi \cos(2\pi f_c t) - A_c \sin \phi \sin(2\pi f_c t)$$

$$= \underbrace{[m(t) + A_c \cos \phi]}_{\cos 2\pi f_c t} - A_c \sin \phi \sin(2\pi f_c t)$$

$$\begin{aligned} \text{envelope} = a(t) &= \sqrt{(m(t) + A_c \cos \phi)^2 + (A_c \sin \phi)^2} \\ &= \sqrt{m^2(t) + 2A_c \cos \phi m(t) + A_c^2} \end{aligned}$$

a) $\phi = 0$

$$a(t) = \sqrt{(m(t) + A_c)^2} = A_c + m(t)$$

b) $\phi \neq 0$ and $|m(t)| \ll A_c/2$

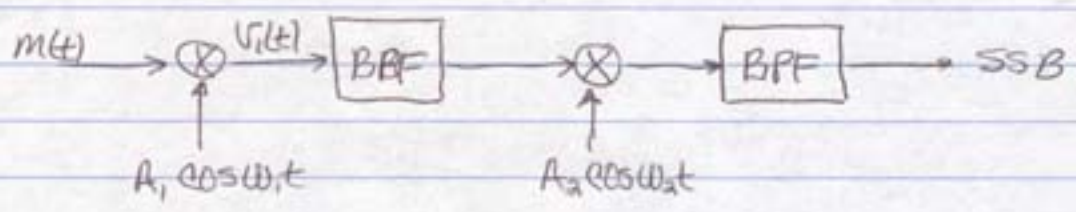
$$\begin{aligned} a(t) &= \sqrt{m^2(t) + 2A_c \cos \phi m(t) + A_c^2} \approx \sqrt{2A_c \cos \phi m(t) + A_c^2} \\ &= A_c \sqrt{1 + \underbrace{\left(\frac{2m(t)}{A_c}\right)}_{\ll 1} \underbrace{\cos \phi}_{\leq 1}} \end{aligned}$$

$$\approx A_c \left(1 + \frac{\cos \phi}{A_c} m(t)\right) = A_c + \cos \phi m(t)$$

Here, again, we find that except for the dc component, A_c , the envelope detector output is proportional to $m(t)$ for a constant value of ϕ .

3. Haykin Problem # 7.18

A two-stage modulator for SSB (Fig 7.18)



message signal : voice 0.3 kHz → 3.4 kHz
 $f_1 = 100 \text{ kHz}$
 $f_2 = 10 \text{ MHz}$

- a) spectrum of $V_1(t)$ - output of first product modulator
 b) - lower sideband occupies 96.6 to 99.7 kHz ⇒ *suppressed by filter*
 - upper sideband occupies 100.3 to 103.4 kHz ⇒ *assume this is passed by filter*

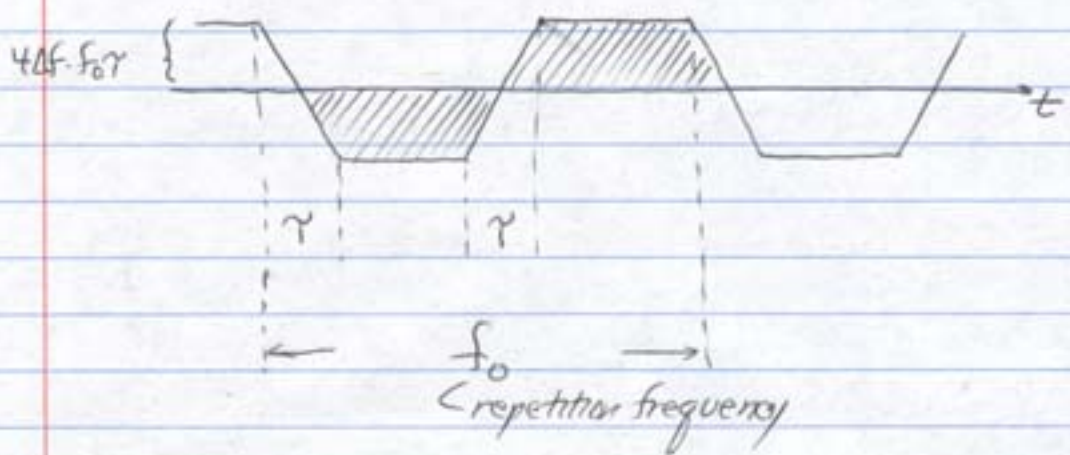
spectrum of $V_2(t)$ - output of second product modulator
 - lower sideband occupies 9.8966 to 9.8997 MHz
 - upper sideband occupies 10.1003 to 10.1034 MHz ⇒ *assume this is passed by filter*

a.) passband of filter #1 100.3 - 103.4 kHz
 guardband of filter #1 99.7 - 100.3 kHz

passband of filter #2 10.1003 - 10.1034 MHz
 guardband of filter #2 9.8997 - 10.1003 MHz

4. Haykin Problem #7.30

The instantaneous frequency of the mixer output is as shown.



The presence of negative frequency merely indicates that the phasor representing the difference frequency at the mixer output has reversed its direction of rotation.

Let N denote the number of beat cycles in one period. Then, noting that N is equal to the shaded region shown above,

$$N = 2 \left[4\Delta f \cdot f_0 \tau \left(\frac{1}{2f_0} - \tau \right) + 2\Delta f \cdot f_0 \tau^2 \right]$$

$$= 4\Delta f \cdot \tau (1 - f_0 \tau)$$

Since $f_0 \tau \ll 1$, $N \approx 4\Delta f \cdot \tau$

Therefore, the number of beat cycles counted over one second is equal to

$$\frac{N}{1/f_0} = 4\Delta f \cdot f_0 \tau$$

5. Haykin Problem # 7.38

$f_c = 100 \text{ MHz}$

$m(t) = A_m \cos 2\pi f_m t, \quad A_m = 20 \text{ V}$
 $f_m = 100 \text{ kHz}$

$k_f = \text{freq sensitivity} = 25 \text{ kHz/V}$

a) $\Delta f = \text{frequency deviation}$
 $= k_f A_m = 25 \times 10^3 \times 20 \text{ Hz} = 5 \times 10^5 \text{ Hz}$

$\beta = \frac{\Delta f}{f_m} = \frac{5 \times 10^5 \text{ Hz}}{10^5 \text{ Hz}} = 5$

$B_T = 2\Delta f (1 + 1/\beta) = 1 \text{ MHz} (6/5) = 1.2 \text{ MHz}$
Carson's rule.

b) Using Fig. 7.41 for $\beta = 5$ gives $B/\Delta f = 3$

$\therefore B = 1.5 \text{ MHz}$

a.) Double amplitude $\Rightarrow \Delta f = 1 \text{ MHz}, \beta = 10$
Carson's rule $B = 2.2 \text{ MHz}$
1% rule $B = 2.75 \text{ MHz}$

d) Double frequency $\Rightarrow \beta = 2.5$
Carson's rule $B = 1.4 \text{ MHz}$
1% rule $B = 2 \text{ MHz}$